




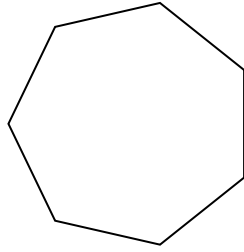
Determine if the shape shown is a regular shape or an irregular shape.

Answers


1)



2)

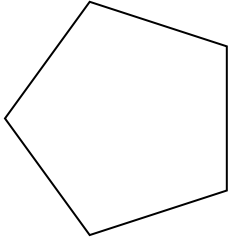


3)




1. _____


4)



5)



6)



2. _____

3. _____

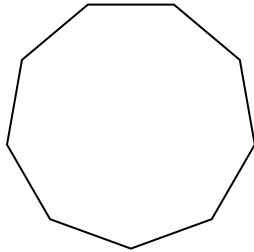
4. _____

5. _____

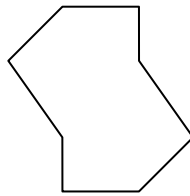
6. _____

7. _____

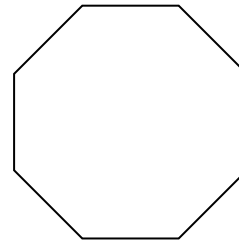
7)



8)



9)



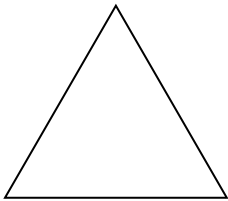
8. _____

9. _____


10. _____

11. _____

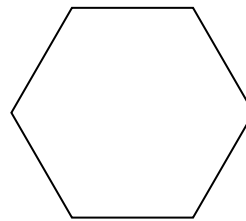
10)



11)



12)




12. _____

13. _____

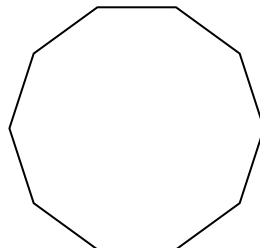
14. _____

15. _____

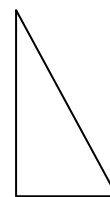
13)



14)




15)



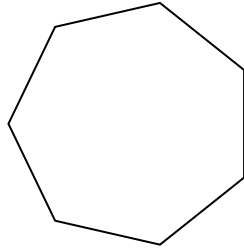


Determine if the shape shown is a regular shape or an irregular shape.


1)



2)



3)



Answers

1. regular

2. regular

3. irregular

4. regular

5. irregular

6. irregular

7. regular

8. irregular

9. regular

10. regular

11. irregular

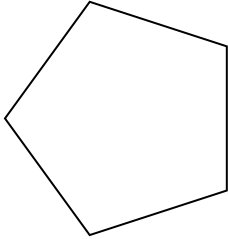
12. regular

13. irregular


14. regular

15. irregular


4)



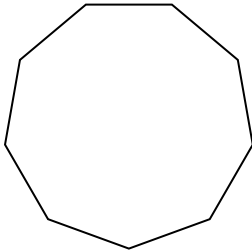
5)



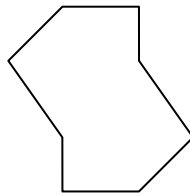
6)



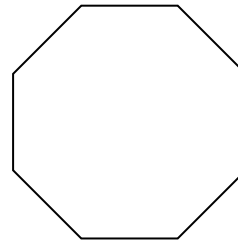
7)



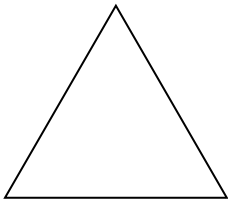
8)




9)



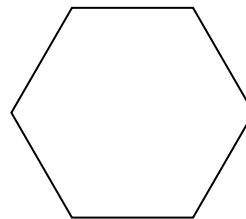
10)




11)



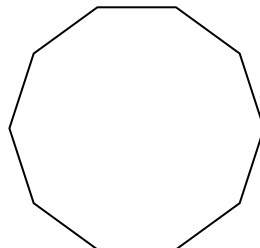
12)



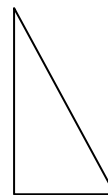
13)



14)



15)

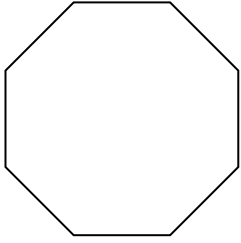





Determine if the shape shown is a regular shape or an irregular shape.

Answers

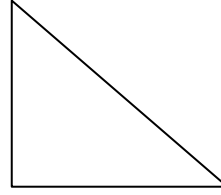
1)



2)



3)



1. _____

2. _____

3. _____

4. _____

5. _____

6. _____

7. _____

8. _____

9. _____

10. _____

11. _____

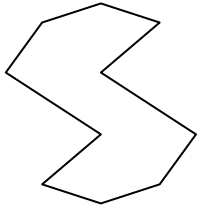
12. _____

13. _____

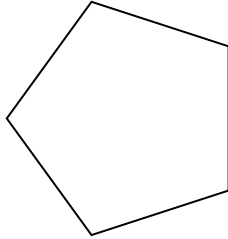
14. _____

15. _____

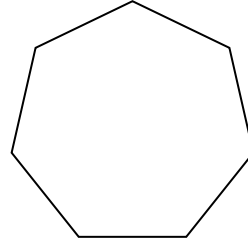
4)



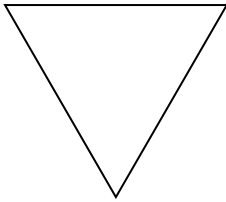
5)




6)



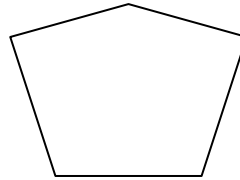
7)



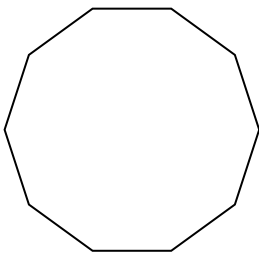
8)



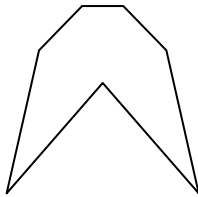
9)



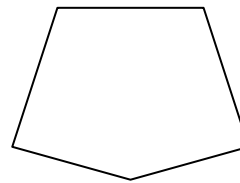
10)



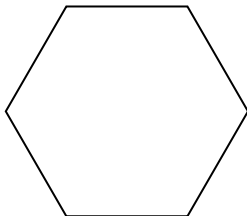
11)




12)



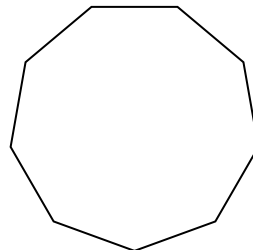
13)



14)



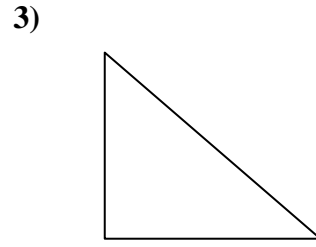
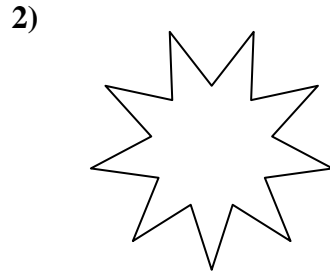
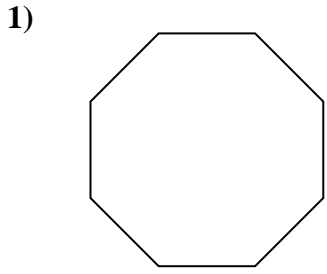
15)





Determine if the shape shown is a regular shape or an irregular shape.

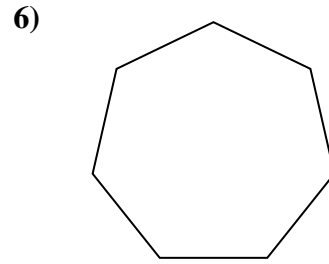
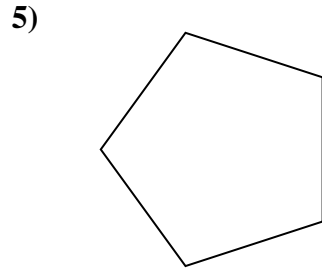
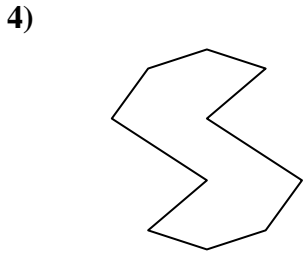
Answers



1. regular

2. irregular

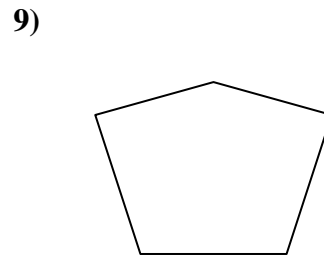
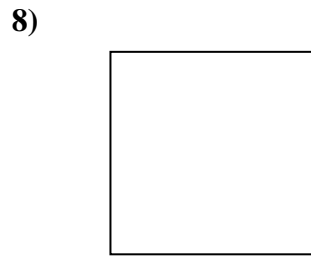
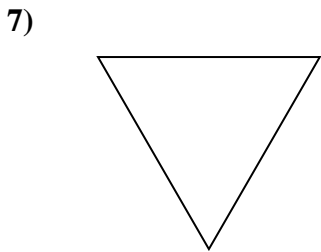
3. irregular



4. irregular

5. regular

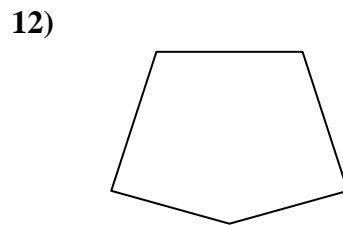
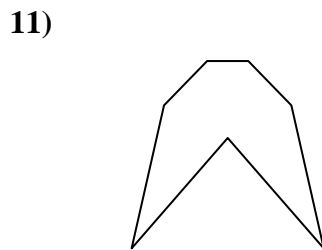
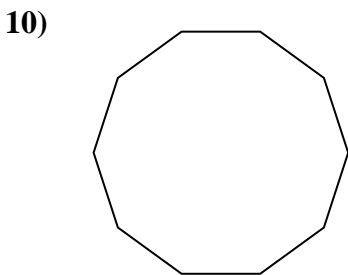
6. regular



7. regular

8. regular

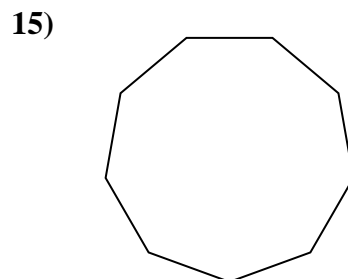
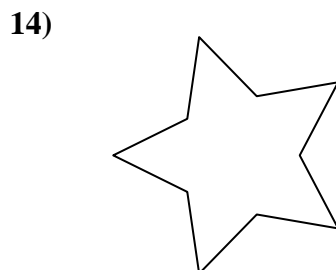
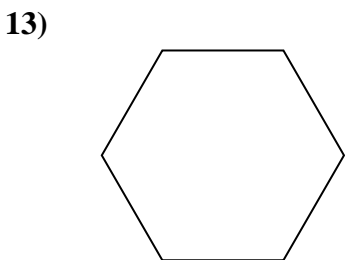
9. irregular



10. regular

11. irregular

12. irregular



13. regular

14. irregular

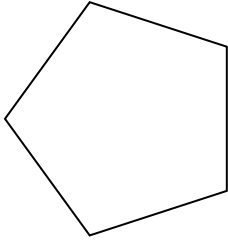
15. regular



Determine if the shape shown is a regular shape or an irregular shape.

Answers

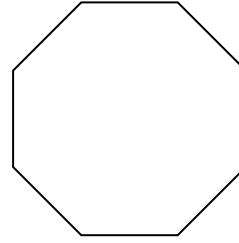
1)



2)



3)




1. _____

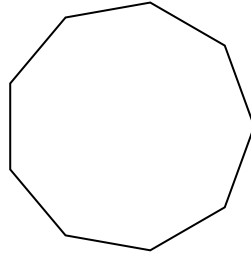
2. _____

3. _____

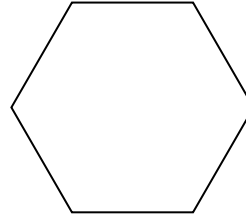
4)



5)



6)



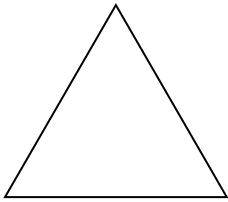
4. _____

5. _____


6. _____

7. _____

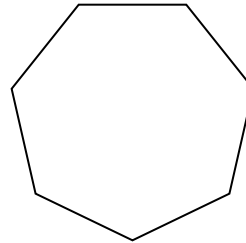
7)



8)



9)



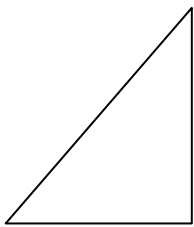
8. _____

9. _____


10. _____

11. _____

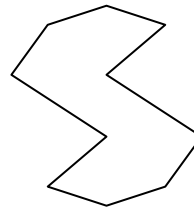
10)



11)



12)



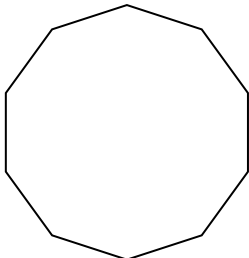
12. _____

13. _____


14. _____

15. _____


13)



14)



15)

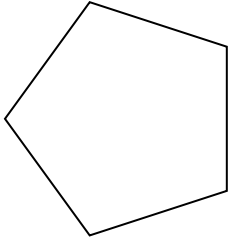





Determine if the shape shown is a regular shape or an irregular shape.

Answers

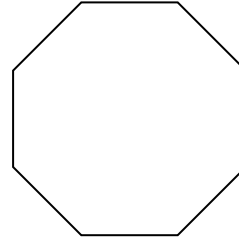
1)



2)



3)




1. regular

2. irregular

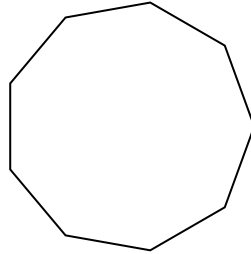
3. regular

4. irregular

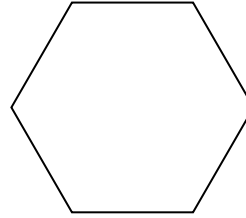
4)



5)



6)

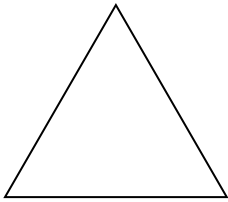


5. regular


6. regular

7. regular

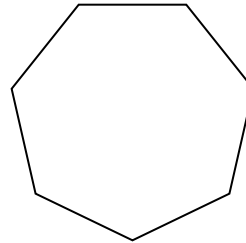
7)



8)



9)

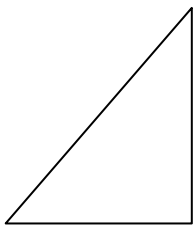


8. regular


9. regular

10. irregular

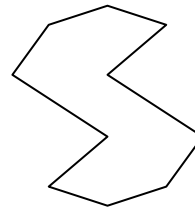
10)



11)



12)

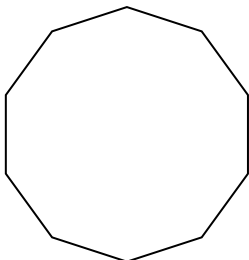


12. irregular


13. regular

14. irregular


13)



14)



15)



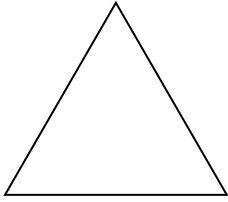
15. irregular



Determine if the shape shown is a regular shape or an irregular shape.

Answers


1)



2)



3)




1. _____

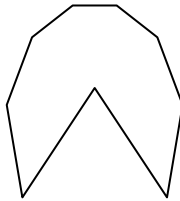
2. _____

3. _____

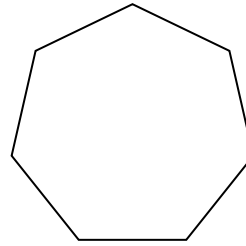
4)



5)



6)




4. _____

5. _____

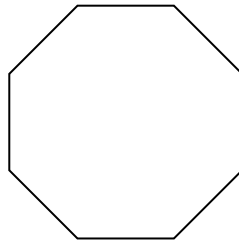
6. _____

7. _____

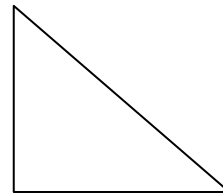
7)



8)



9)



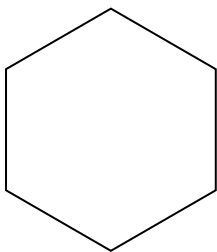
8. _____

9. _____

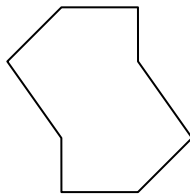
10. _____

11. _____

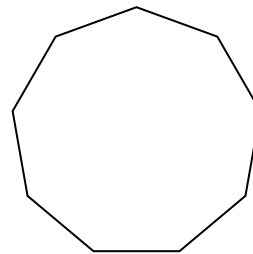
10)



11)



12)




12. _____

13. _____

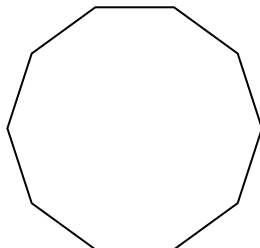
14. _____

15. _____

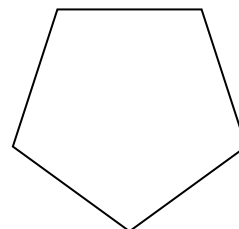
13)



14)



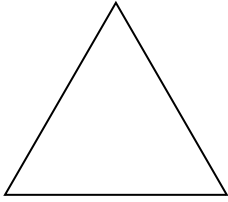
15)





Determine if the shape shown is a regular shape or an irregular shape.


1)




2)



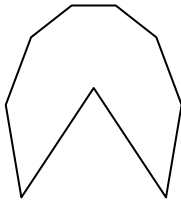
3)



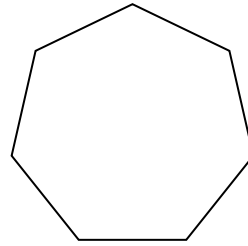
4)




5)



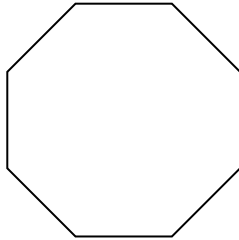
6)



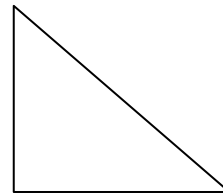
7)



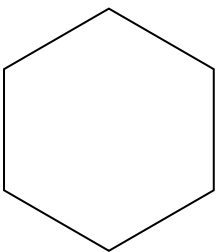
8)



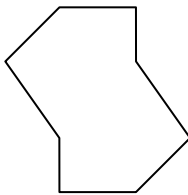
9)



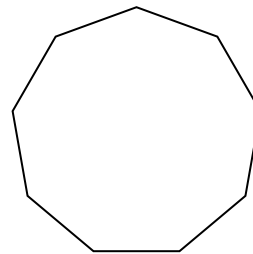
10)




11)



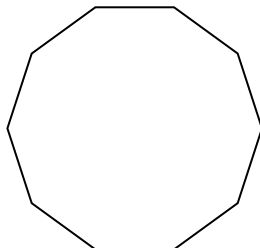
12)



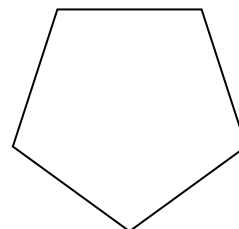
13)



14)



15)



Answers

1. regular

2. irregular

3. irregular

4. irregular

5. irregular

6. regular

7. regular

8. regular

9. irregular

10. regular

11. irregular

12. regular

13. irregular

14. regular

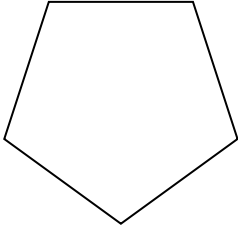
15. regular



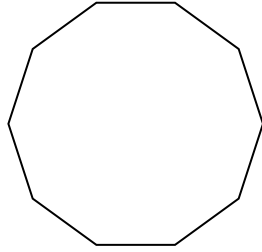
Determine if the shape shown is a regular shape or an irregular shape.

Answers


1)



2)



3)

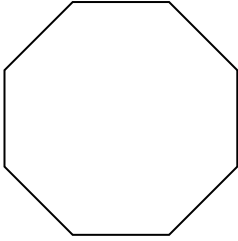


1. _____


2. _____

3. _____

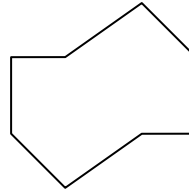
4)



5)



6)

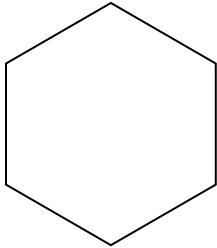


4. _____

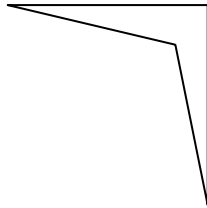
5. _____

6. _____

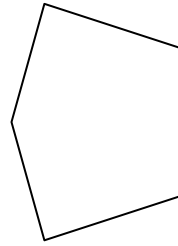
7)



8)



9)




7. _____

8. _____

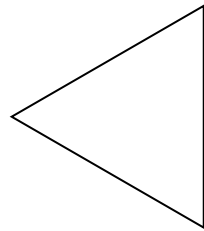
9. _____

10. _____


10)



11)



12)



11. _____


12. _____

13. _____

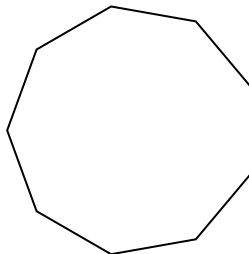
14. _____

15. _____

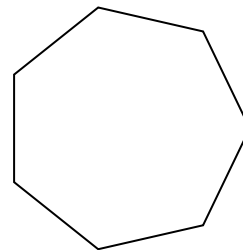
13)



14)



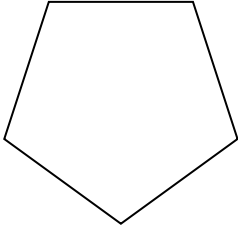
15)



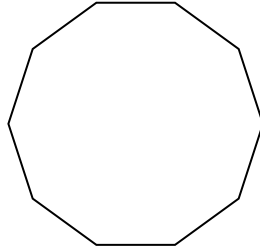


Determine if the shape shown is a regular shape or an irregular shape.


1)



2)



3)



Answers

1. regular

2. regular

3. regular

4. regular

5. irregular

6. irregular

7. regular

8. irregular

9. irregular

10. irregular

11. regular

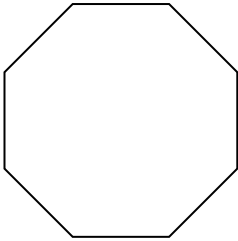
12. irregular

13. irregular


14. regular

15. regular

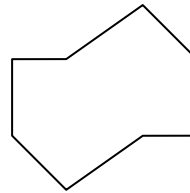
4)



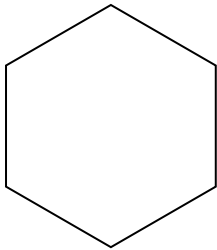
5)



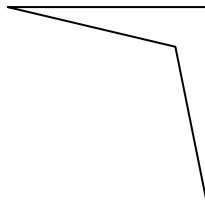
6)



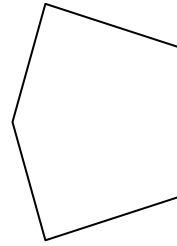
7)




8)



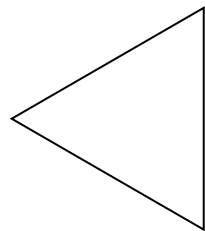
9)




10)




11)



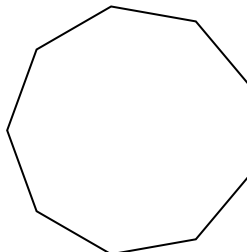
12)



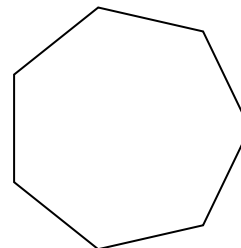
13)



14)



15)

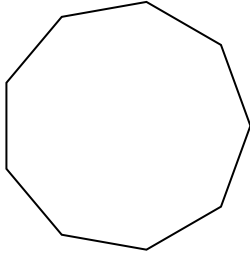





Determine if the shape shown is a regular shape or an irregular shape.

Answers

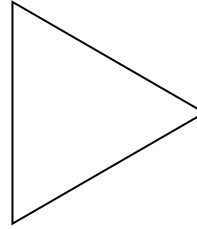
1)



2)



3)

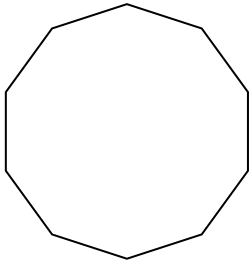


1. _____

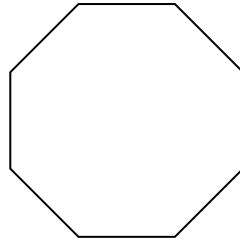
2. _____

3. _____

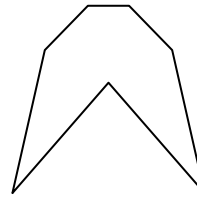
4)



5)



6)




4. _____

5. _____

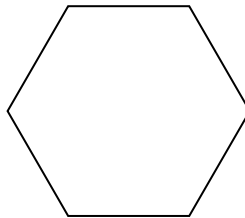
6. _____

7. _____


7)



8)



9)



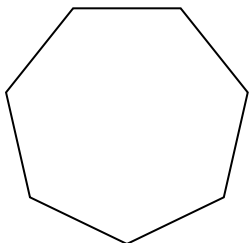
8. _____

9. _____

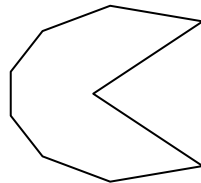
10. _____

11. _____


10)



11)



12)



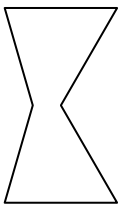
12. _____

13. _____

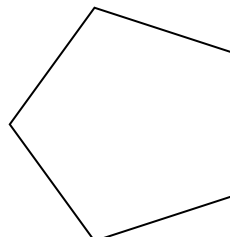
14. _____

15. _____

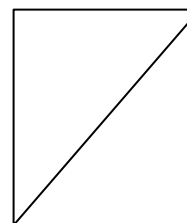
13)



14)



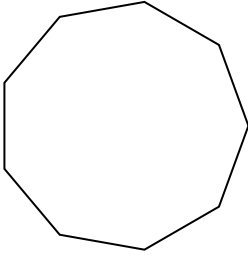
15)






Determine if the shape shown is a regular shape or an irregular shape.

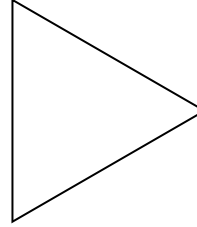
1)



2)



3)



Answers

1. regular

2. regular

3. regular

4. regular

5. regular

6. irregular

7. irregular

8. regular

9. irregular

10. regular

11. irregular

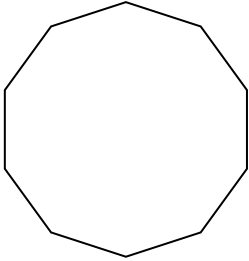
12. irregular

13. irregular

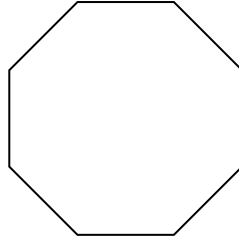
14. regular

15. irregular

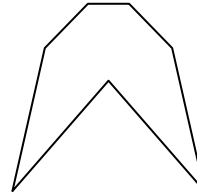
4)




5)



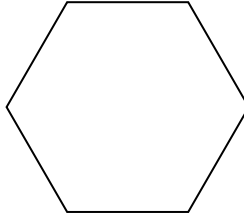
6)




7)



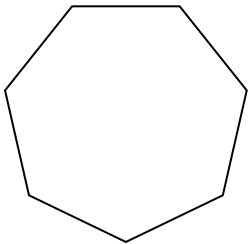
8)



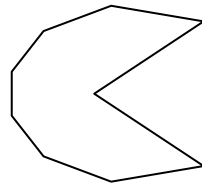
9)




10)



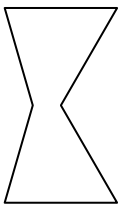
11)



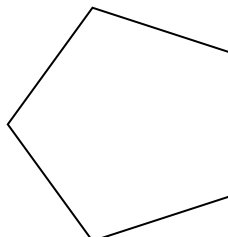
12)



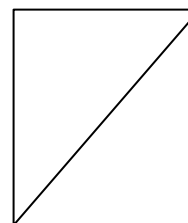
13)



14)



15)

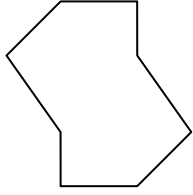




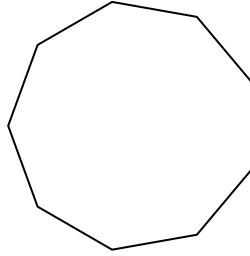
Determine if the shape shown is a regular shape or an irregular shape.

Answers

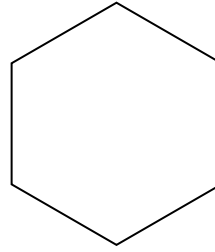
1)



2)



3)




1. _____


2. _____

3. _____

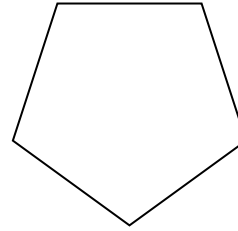
4)



5)



6)



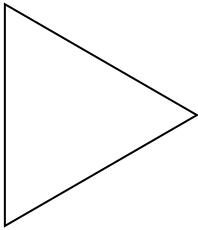
4. _____

5. _____

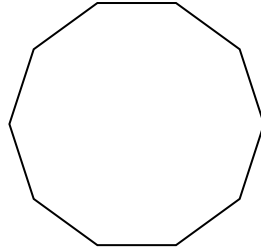
6. _____

7. _____


7)



8)



9)



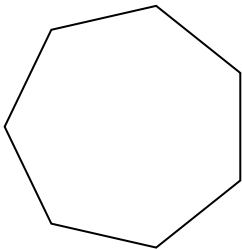
8. _____

9. _____

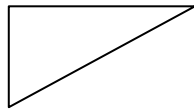
10. _____

11. _____


10)



11)



12)



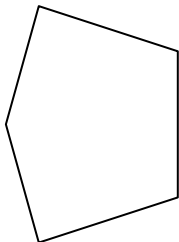
12. _____

13. _____

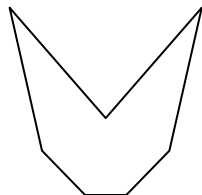
14. _____

15. _____

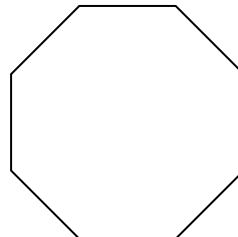
13)



14)



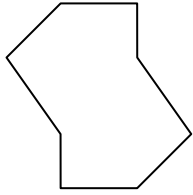
15)



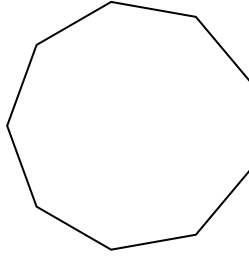


Determine if the shape shown is a regular shape or an irregular shape.

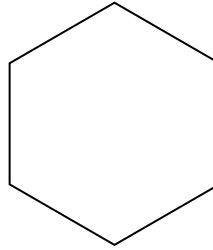
1)



2)



3)



Answers

1. irregular

2. regular

3. regular

4. irregular

5. irregular

6. regular

7. regular

8. regular

9. irregular

10. regular

11. irregular


12. regular

13. irregular

14. irregular

15. regular

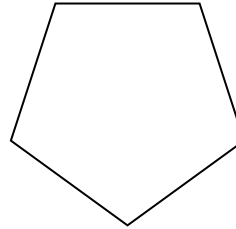
4)



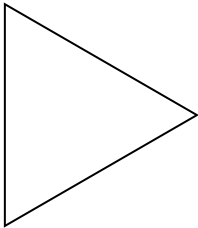
5)



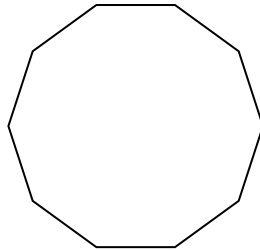
6)




7)



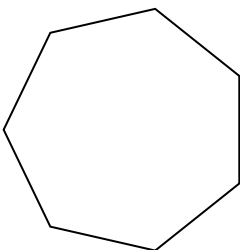
8)



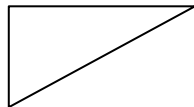
9)




10)



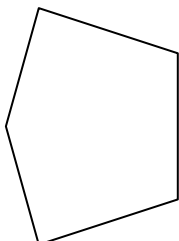
11)




12)



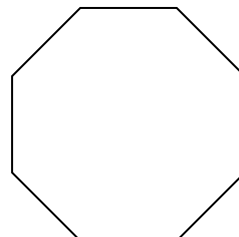
13)



14)



15)

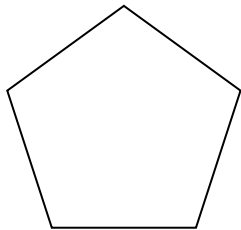




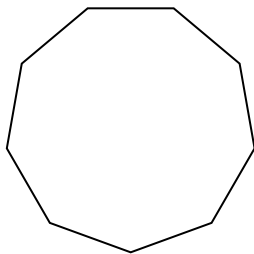
Determine if the shape shown is a regular shape or an irregular shape.

Answers

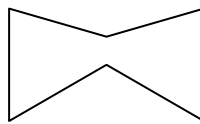
1)



2)



3)



1. _____

2. _____

3. _____

4. _____

5. _____

6. _____

7. _____

8. _____

9. _____

10. _____

11. _____

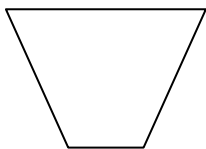
12. _____

13. _____

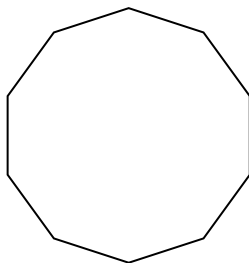
14. _____

15. _____

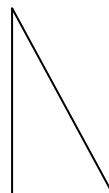
4)



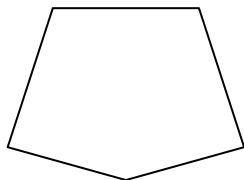
5)




6)



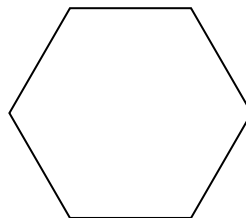
7)




8)



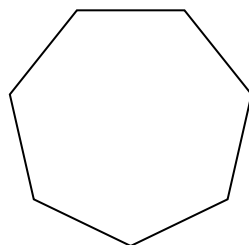
9)




10)




11)



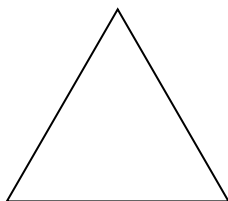
12)




13)



14)



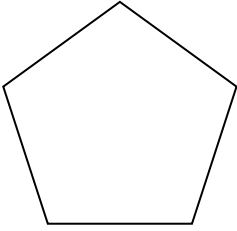
15)



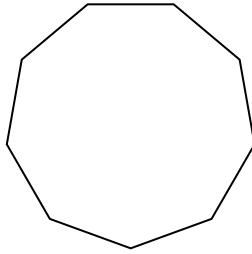


Determine if the shape shown is a regular shape or an irregular shape.

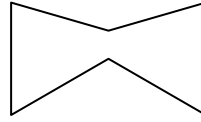
1)



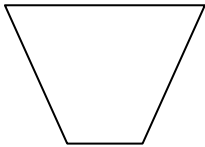
2)



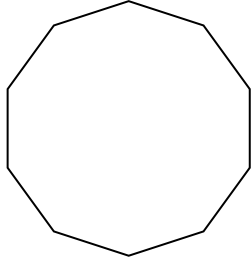
3)



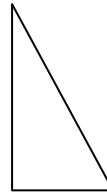
4)



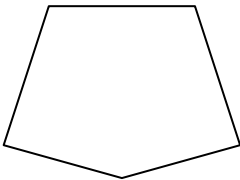
5)




6)



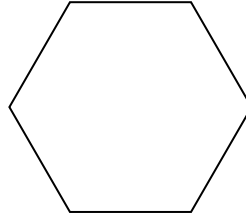
7)




8)



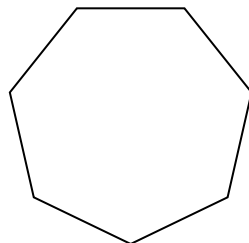
9)




10)




11)



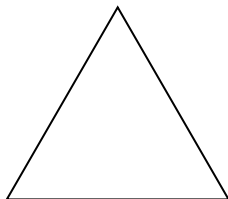
12)



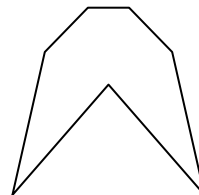
13)



14)



15)



Answers

1. regular

2. regular

3. irregular

4. irregular

5. regular

6. irregular

7. irregular

8. regular

9. regular

10. irregular

11. regular

12. irregular

13. irregular

14. regular


15. irregular



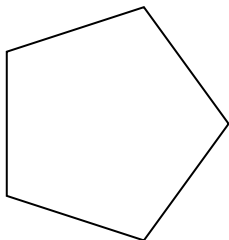
Determine if the shape shown is a regular shape or an irregular shape.

Answers

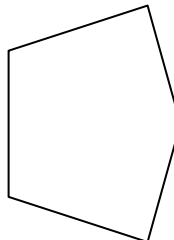
1)



2)



3)




1. _____

2. _____

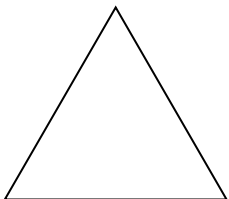
3. _____

4. _____


4)



5)



6)




5. _____

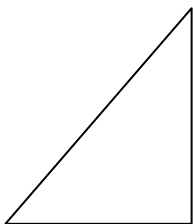
6. _____

7. _____


7)



8)



9)



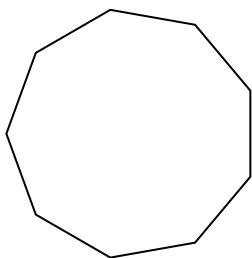
8. _____

9. _____

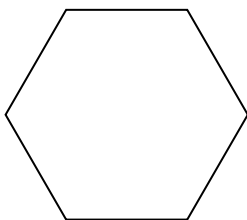
10. _____

11. _____

10)



11)



12)



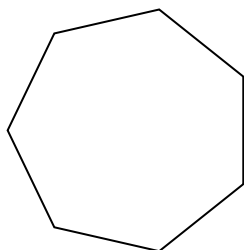
12. _____

13. _____


14. _____

15. _____

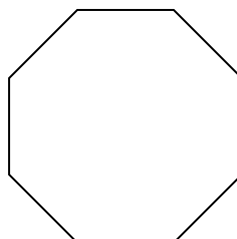
13)



14)




15)



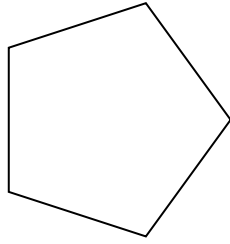


Determine if the shape shown is a regular shape or an irregular shape.

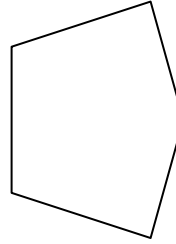
1)




2)



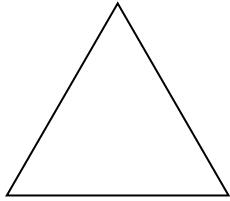
3)




4)




5)



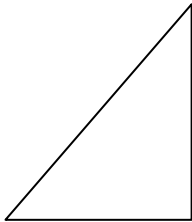
6)



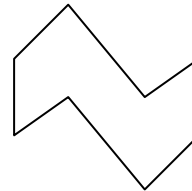
7)



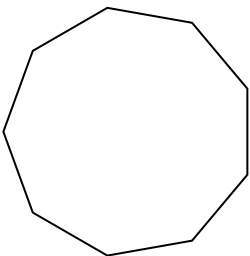
8)



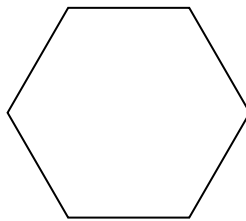
9)




10)



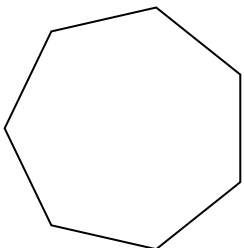
11)




12)



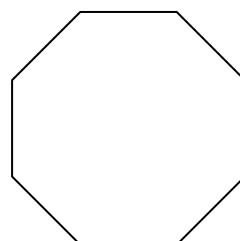
13)



14)



15)



Answers

1. irregular

2. regular

3. irregular

4. irregular

5. regular

6. irregular

7. regular

8. irregular

9. irregular

10. regular

11. regular

12. irregular

13. regular

14. irregular

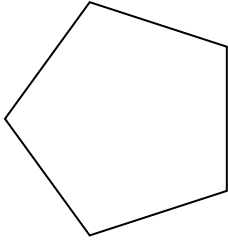
15. regular



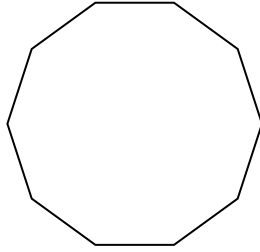
Determine if the shape shown is a regular shape or an irregular shape.

Answers

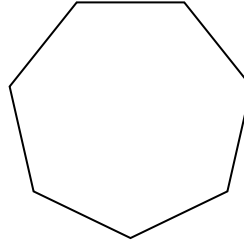
1)



2)



3)




1. _____

2. _____

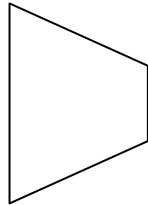
3. _____

4. _____


4)



5)



6)

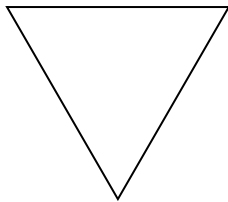


5. _____


6. _____

7. _____

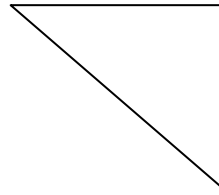
7)



8)



9)



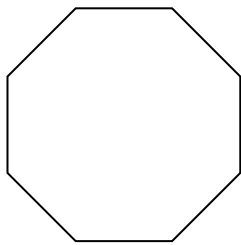
8. _____

9. _____


10. _____

11. _____


10)



11)



12)




12. _____

13. _____

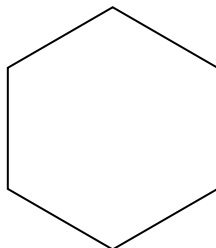
14. _____

15. _____

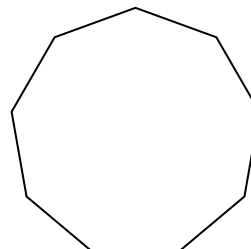
13)



14)



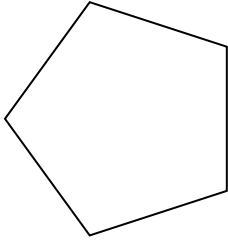
15)



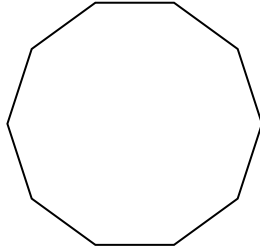


Determine if the shape shown is a regular shape or an irregular shape.

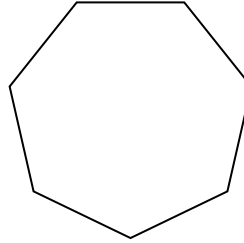
1)



2)



3)



Answers

1. regular

2. regular

3. regular

4. irregular

5. irregular

6. irregular

7. regular

8. irregular

9. irregular

10. regular

11. irregular


12. irregular

13. regular

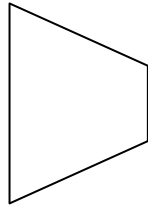
14. regular

15. regular


4)



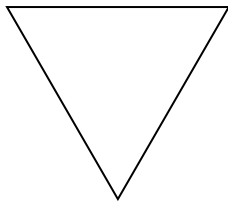
5)




6)



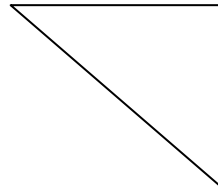
7)



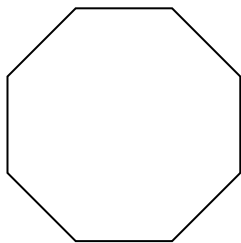
8)




9)




10)




11)



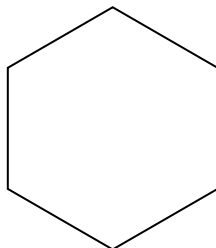
12)



13)



14)



15)

